

8 Times Table Activities

Count in 8s and colour in the grid:

1	2	3	4	5	6	7	8	9	10
11	12	13	14	15	16	17	18	19	20
21	22	23	24	25	26	27	28	29	30
31	32	33	34	35	36	37	38	39	40
41	42	43	44	45	46	47	48	49	50
51	52	53	54	55	56	57	58	59	60
61	62	63	64	65	66	67	68	69	70
71	72	73	74	75	76	77	78	79	80
81	82	83	84	85	86	87	88	89	90
91	92	93	94	95	96	97	98	99	100

Work out these answers:

a) $2 \times 8 =$ _____

d) $8 \times 8 =$ _____

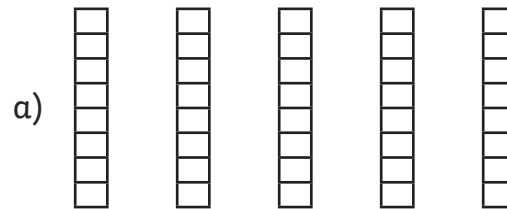
b) $10 \times 8 =$ _____

e) $7 \times 8 =$ _____

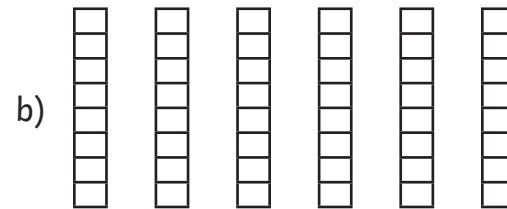
c) $5 \times 8 =$ _____

f) $12 \times 8 =$ _____

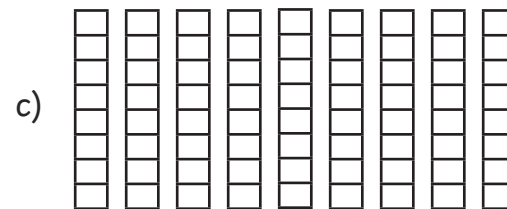
How many blocks are there?



_____ \times _____ = _____



_____ \times _____ = _____



_____ \times _____ = _____