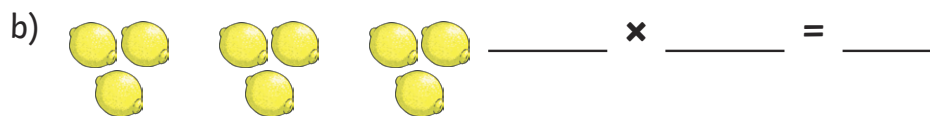




# 3 Times Table Activities

Count in 3s and colour in the grid:

1	2	3	4	5	6
7	8	9	10	11	12
13	14	15	16	17	18
19	20	21	22	23	24
25	26	27	28	29	30
31	32	33	34	35	36

How many pieces of fruit are there?



Work out these answers:

a)  $3 \times 4 =$  \_\_\_\_\_ f)  $3 \times 6 =$  \_\_\_\_\_

b)  $3 \times 3 =$  \_\_\_\_\_ g)  $3 \times 7 =$  \_\_\_\_\_

c)  $3 \times 5 =$  \_\_\_\_\_ h)  $3 \times 1 =$  \_\_\_\_\_

d)  $3 \times 2 =$  \_\_\_\_\_ i)  $3 \times 11 =$  \_\_\_\_\_

e)  $3 \times 9 =$  \_\_\_\_\_ j)  $3 \times 8 =$  \_\_\_\_\_

